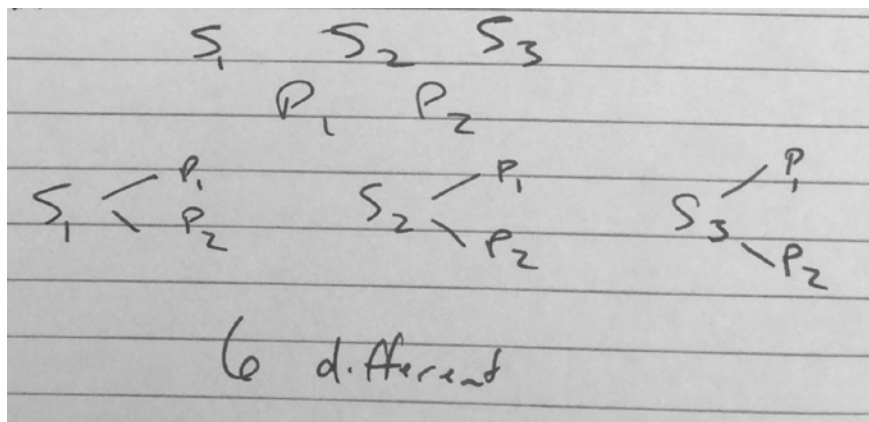




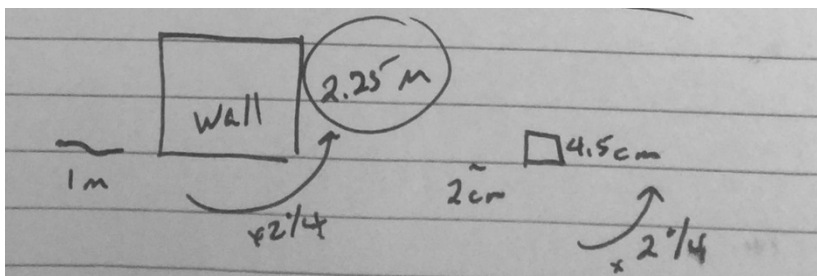
### Security Guard Problem

The security guard can choose from three different shirts and two different pairs of pants for his uniform. How many different combinations does he have to choose from?



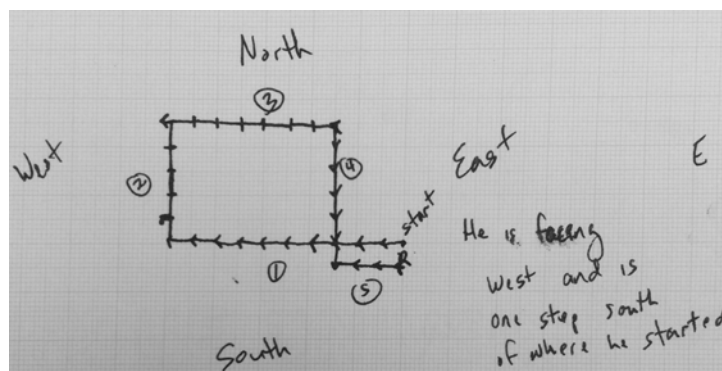
### Snake Problem

Matthew is at a zoo. He takes a picture of a one-meter snake beside a brick wall. When he developed his pictures, the one-meter snake is 2cm long and the wall is 4.5cm high. What was the actual height of the brick wall in cm?



### Directionally Challenged Problem

Mr. Roberts faced west. He walked ten steps forward. Then, without turning, he took five sideways steps to his right. Then, he took seven steps backward. Then, he turned left and walked six steps forward. Then, he turned right and took three steps backward. Which direction is Mr. Roberts facing, and how far is he from where he started?



**Bag of Marbles Problem**

A bag contains red, blue, and yellow marbles. The ratio of red to blue to yellow marbles is 3:5:7. If there are 75 marbles, how many of each color are in the bag?

red	3	15
blue	5	25
yellow	7	35
15		75

**What's My Number Problem**

A number is divided by 2 and then added to 11. The result is 19. What is the original number?

Work backwards

$$19 - 11 = 8$$

$$8 \times 2 = 16$$

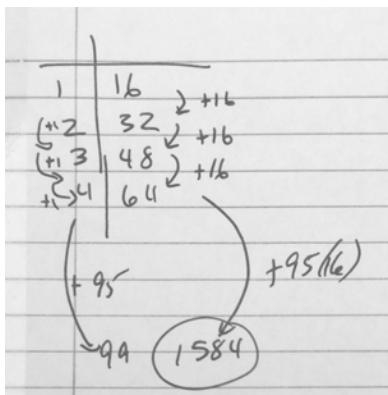
**Garden Problem**

Sergio used 20 yards of fence to enclose a rectangular garden on the side of his house. He used the wall of his house for one side of the garden. He wanted the rectangle to have the greatest possible area. Find the dimensions and the area of Sergio's garden.

20yd perimeter	L	10	<del>12</del>	8
	w	5	4	6
	w	5	4	6
Area		50	48	48

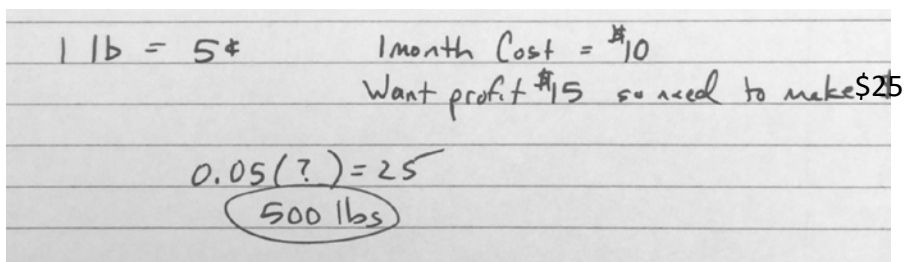
### Hexa's Counting Problem

The first four numbers Hexa said were 16, 32, 48, and 64. If she keeps counting this way, what is the 99<sup>th</sup> number Hexa will say?



### Recycling Problem

Our school wants to join a recycling organization. For every 1 pound of recycling material, the company will pay the school 5 cents. However, it charges a \$10 membership fee per month. In 1 month, how many pounds does the school need to collect to have a profit of at least \$15?



### Circle Problem

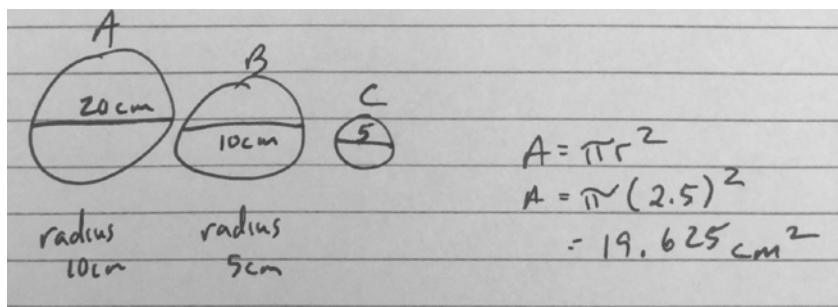
There are three circles:

A = the largest

B = the middle sized one

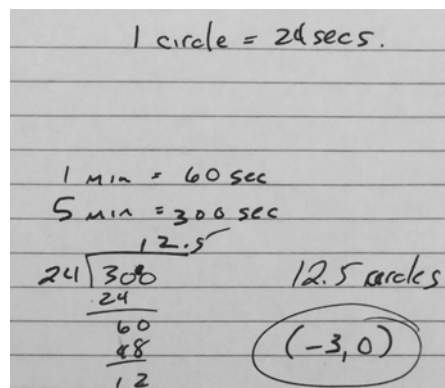
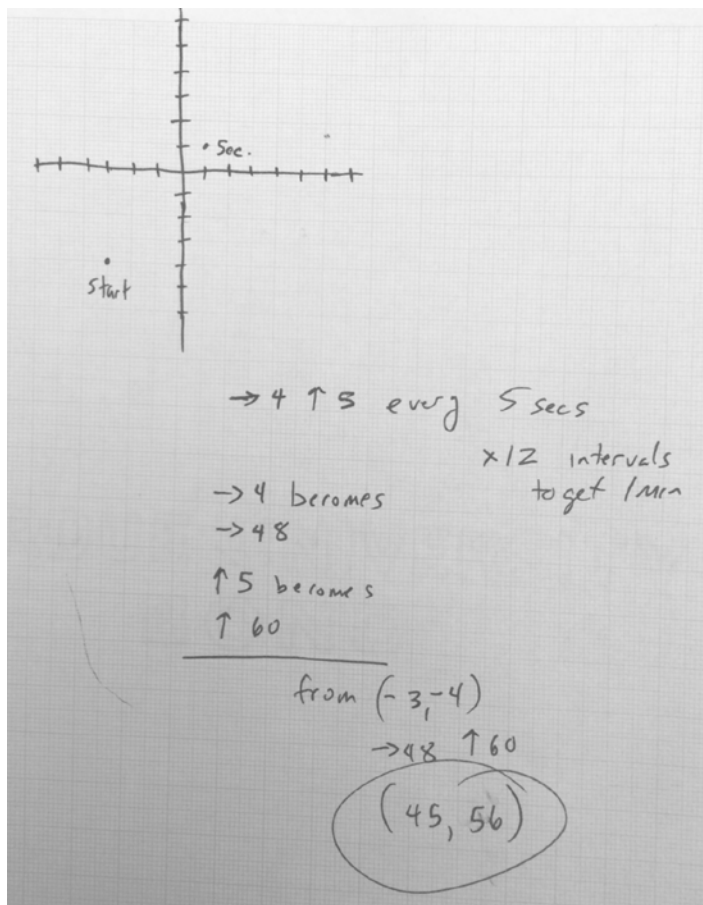
C = the smallest

Circle A has a diameter of 20cm. The smaller circles are drawn so that the radius of Circle A is the diameter of Circle B, and the radius of circle B is the diameter of Circle C. What is the area of circle C?



### A Bug's Life

A bug starts at  $(3, 0)$  and crawls counterclockwise around this circle. It takes the bug 24 seconds to crawl around the circle 1 time. Where is the bug after 5 minutes? Explain.



### Bugging Out

A bug is crawling across my graph paper in a straight line. When I first notice it, the bug is at the location  $(-3, -4)$ . Five seconds later, it is at the location  $(1, 1)$ . Assuming that the bug crawls at a constant rate, what are the coordinates of the point where the bug is located after 1 minute? Explain.

### Two-mile Race

In a two-mile race, Ed can beat Faith by  $\frac{1}{5}$  of a mile. In a two-mile race, Faith can beat Matt by  $\frac{1}{10}$  of a mile. If Ed and Matt were to have a two-mile race, by how much would Ed win? Explain.

When Ed finishes the two miles, Faith has covered  $\frac{9}{10}$  of the two miles. When Faith has finished the two miles, Matt has covered  $\frac{19}{20}$  of the two miles. So when Ed has finished the two miles, Matt has covered  $\frac{19}{20}$  of the  $\frac{9}{10}$  of two miles that Faith has covered at that point. This is  $\frac{171}{200}$  of the two miles. This means he still has  $\frac{29}{100}$  of the last mile to go, so Ed is  $\frac{29}{100}$ , or 0.29 miles ahead.