

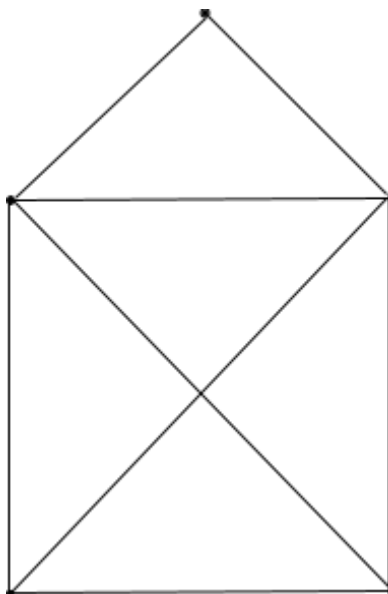


Task:

For each of these vertex-edge graphs, try to trace it (without lifting your pen from the paper, and without tracing any edge twice). If you succeed, mark your starting point and number the edges in the order you used them.

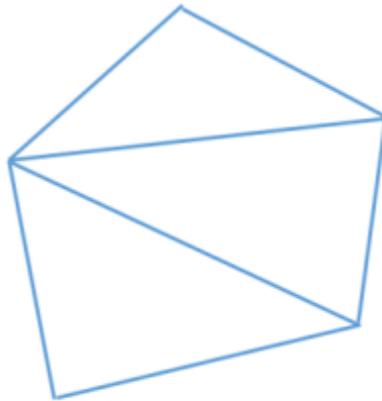


----- *please wait until after group discussion before working on the next graph* -----

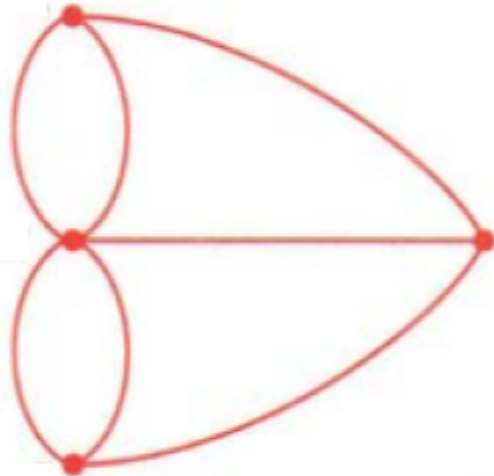




----- please wait until after group discussion before working on the next graph -----



----- please wait until after group discussion before working on the next graph -----



----- please wait until after group discussion before working on the next graph -----

Bridges of Königsberg

